

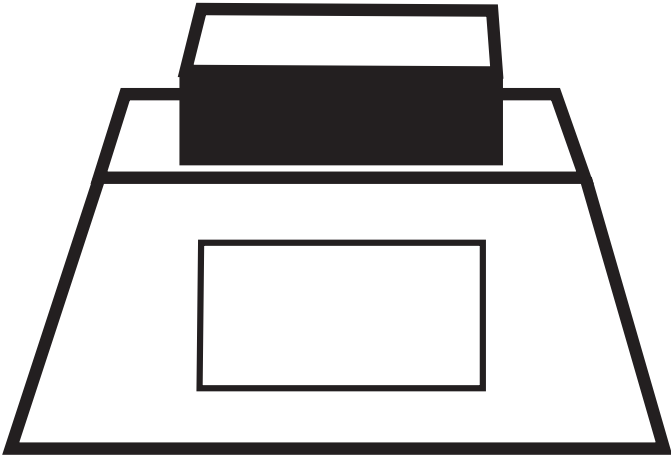
Brian Clough Activity Pack








**Colour
me
cool!**



**Design
your
statue!**





**Albert's
Football
Friends**

Colour in Albert's football friends, name them and draw your own friend.



**Albert's
Football
Friends**

Colour in Albert's football friends, name them and draw your own friend.

Brian Clough Small Wordsearch

C	V	W	Y	B	M	U	S	A	T	G	P	L
L	U	K	L	B	R	I	A	N	Z	H	E	O
O	N	P	I	F	D	V	D	W	S	U	F	C
U	Q	A	M	R	O	L	X	I	T	A	X	A
G	S	R	A	Z	G	O	U	A	M	I	V	L
H	Z	K	F	N	U	Q	T	I	N	Y	T	F
M	I	D	D	L	E	S	B	R	O	U	G	H
F	O	O	T	B	A	L	L	E	R	I	O	Y

Can you find all 8 words?

BRIAN

FOOTBALLER

CLOUGH

FAMILY

STATUE

LOCAL

MIDDLESBROUGH

PARK



Brian Clough Large Wordsearch




ALBERTPARK
BOOTS
CHARACTER
STRIKER
SUNDERLAND
HARTLEPOOL
ENGLAND

FAMILY
FOOTBALL
GOALS
COACH
LOCAL
DERBY
HERO

HOME
INJURY
GROVEHILL
MANAGER
TRAIN
TROPHY
STATUE

PLAYER
OLDBIGHEAD
BRIANCLOUGH
GREENJUMPER
MIDDLESBROUGH
NOTTINGHAMFOREST
VALLEYROAD



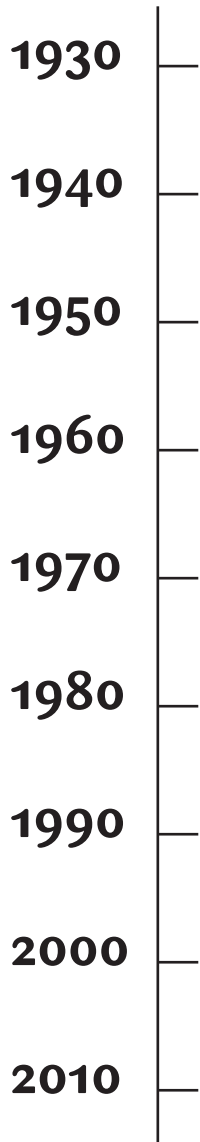


Colour Brian in the style of the artist Andy Warhol.



Design and colour Albert's football strip.

Brian Clough Timeline



Here are some key dates from Brian Clough's life.
Put them in their right places on the timeline.

- When was he born
- when he signed for Middlesbrough
- when he became a manager
- when he signed Trevor Francis the first million pound player
- When he died

Try to put these other historical events in the right place on the timeline.

- The Depression
- World War Two
- Falklands war
- The Millennium

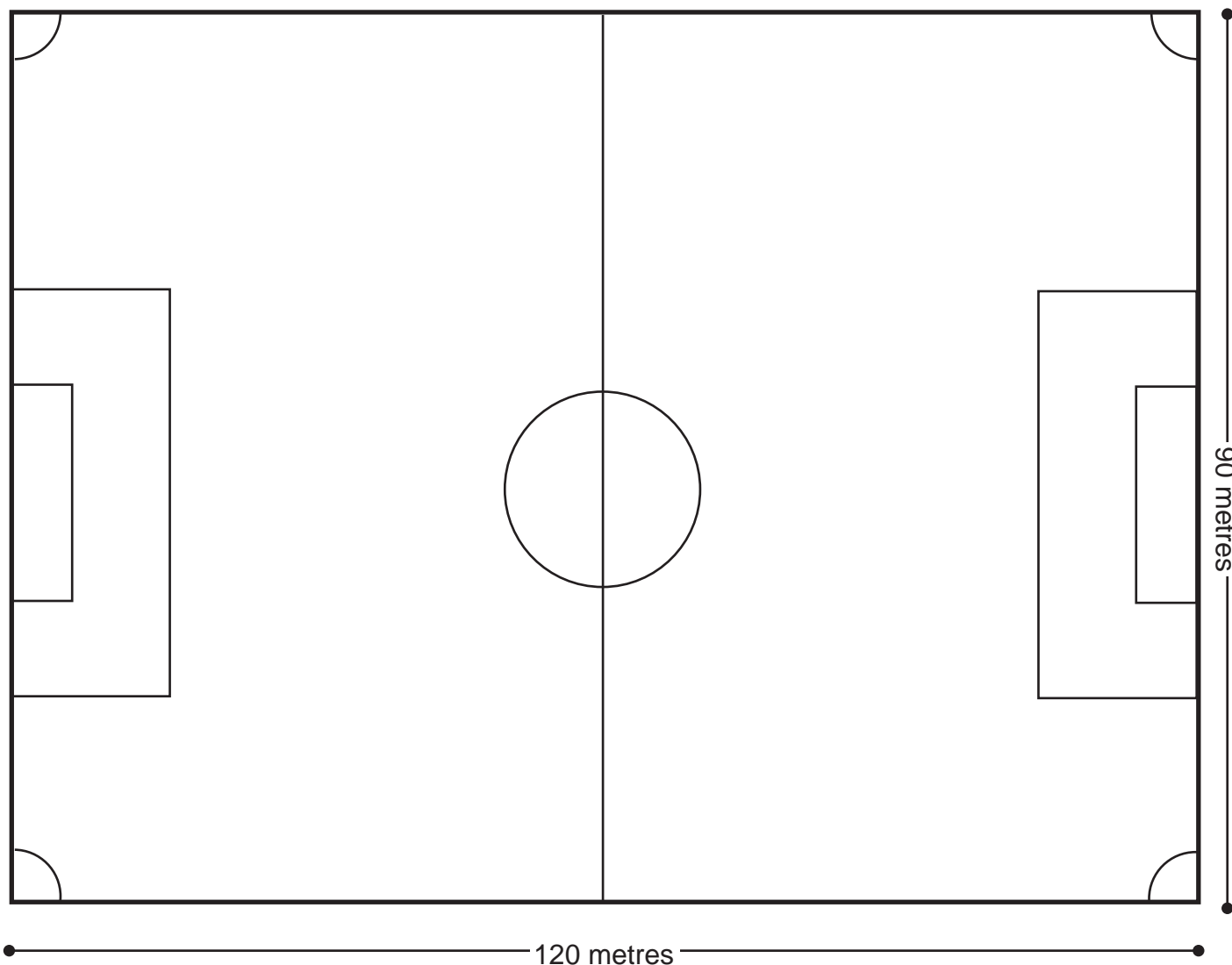


Evening Gazette

**Write
up**

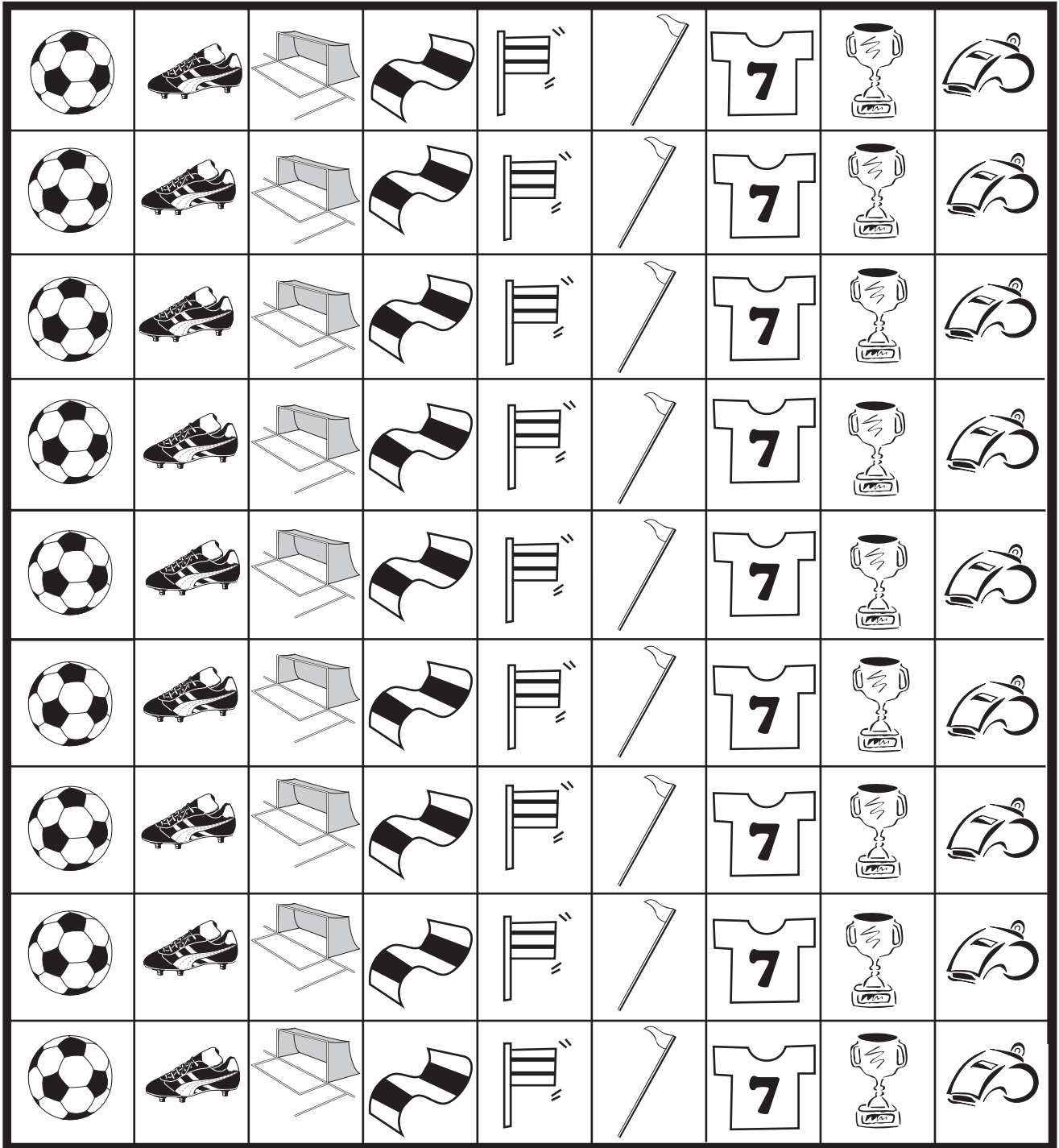
You are an Ace Reporter with the Evening Gazette and have just interviewed Brian Clough.

Write up your interview using one of his quotes to highlight your story.




- 1 Can you draw the lines of symmetry on the overhead view of this pitch?
- 2 Look for the rectangles, the squares, the circle, the half circles and the quarter circles.
Colour in the shapes with different colours (be careful some may have several colours.)
- 3 Can you find the whole circles half circles and quarter circles?
- 4 How many circles would they make altogether?
- 5 What is the perimeter of the football pitch?
- 6 What is the area of the football pitch?





Cut out the counters to help you find the answers to the puzzles.





To do Sudoku you must make every column, row and mini-grid contain one of each of the pictures.

There is only one way to do the puzzles. Use the counters to help. The counters can be easily removed if you find the counter is in the wrong place.

For the medium grid you will need to cut out:

3 football counters

5 boot counters


3 scarf counters

6 goal counters

4 shirt counters

5 trophy counters





To do Sudoku you must make every column, row and mini-grid contain one of each of the pictures.

There is only one way to do the puzzles. Use the counters to help. The counters can be easily removed if you find the counter is in the wrong place.


For the easy grid you will need to cut out:

- 3 goal counters
- 1 boot counter
- 3 scarf counters





Medium
Football
Sudoku
ANSWERS



**Easy
Football
Sudoku
ANSWERS**

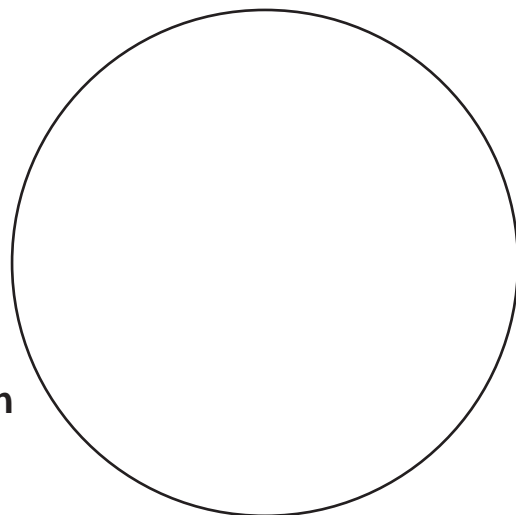
1 What is the name of the shape used to make up a football? _____

2 Can you estimate how many hexagons make up a football?

My estimate is _____ hexagons

3 Try other shapes to design your own football.

My design



4 How many people are in the crowd? estimate, count and difference




Estimate _____

Count _____

Difference _____

How many people are on the pitch? estimate, count and difference



Estimate _____

Count _____

Difference _____

5 Brian used to wear the number 9 shirt. Can you write 9 in letters? _____

Brian was one of seven children. Can you write seven as a number? _____

Brian lived at eleven Valley road. Can you write eleven as a number? _____



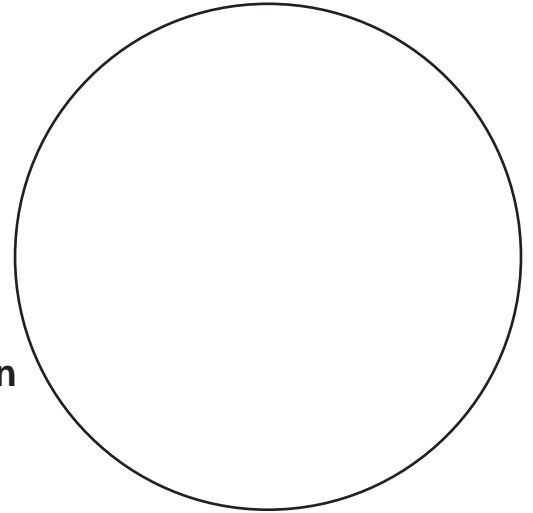
1 What is the name of the polygon used to make up a football? _____

2 Can you estimate how many hexagons make up a football?

My estimate is _____ hexagons

3 Try other shapes and polygons to design your own football.

My design



4 How many people are in the crowd?
estimate, count and difference




Estimate _____

Count _____

Difference _____

How many people are on the pitch?
estimate, count and difference



Estimate _____

Count _____

Difference _____

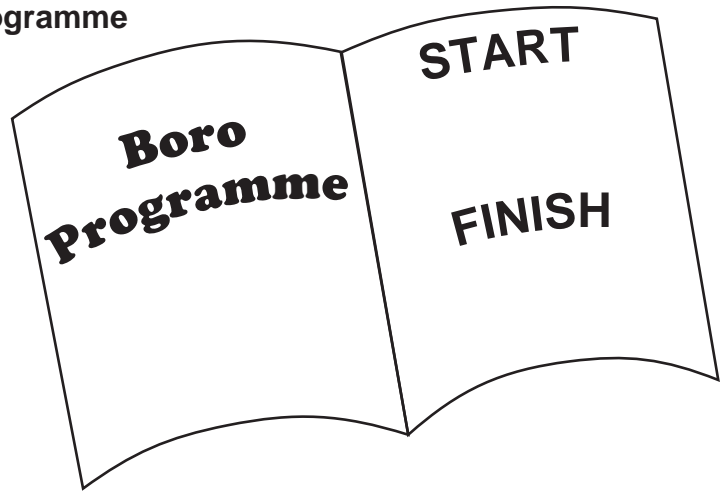


- 5 The length of time a match lasts is $\frac{3}{4}$ hour and then a break for half time and then another $\frac{3}{4}$ hour.

If the match starts at 2pm what time will it be half time?

If the team take 20 minutes for half time, what time should the match finish?

Write your answers on the Match Programme



- 6 30,000 people go to a football match and the tickets cost £24 each.

What are the total takings?

Write your answers on the Accounts Sheet.



ACCOUNTS	
Number of tickets sold	Total takings
	£

